

GREENLAWNS SCHOOL, WORLI
FINAL EXAMINATION-2016
GEOGRAPHY

STD:VII
DATE: 18/02/2016

TIME: 1½hrs.
MARKS: 80

Note : Attempt all questions.

Attach the map to the answer booklet.

All diagrams to be drawn in pencil.

QI. Fill in the blanks with the appropriate answers: [6]

1. The main elements of the inner core are _____ and _____.
2. The water of the oceans is in constant motion in the form of _____, _____ and _____.
3. The Amazon River rises in the _____ mountains and flows _____ across the continent of South America.
4. The tropical climate receives rainfall in the summer brought by _____ trade winds and _____ trade winds.
5. The tropical grasslands are known as the _____ in Guyana and _____ in Brazil.
6. _____ is mined in Guyana and Suriname.

QII. State whether the following statements are true or false. If false rewrite the correct statement: [5]

1. The bark of the cinchona is used for making chewing gum.
2. Humus is fine powdered rock present in soil.
3. Most of South America produces only consumer goods
4. Mt Cayambe of Ecuador is an active volcano.
5. The Andes Mountains are a store house of mineral wealth.
6. In January the average temperature is ^{over} 27°C in South America.
7. Fruit trees grow well in the warm temperate forest.

QIII Name the following. Write only the answers: [8]

1. Any two layers of the earth that are not in the solid form.
2. Any two types of metamorphic rocks.
3. Vast cattle farms in the pampas are called _____
4. Any two cash crops grown in Brazil.
5. The bird dropping used as manure.
6. Two examples of ~~the~~ wildlife found in the desert sand of the Atacama in South America.
7. Two examples of wildlife that are believed to belong to the camel family in South America.
8. The latitudinal extension of South America.
9. The world's largest river by volume in South America.

10. Any two animals of the cat family those are common in South America.

QIV.A Define the following terms:

[5½]

1. Lapse rate
2. Hydrological cycle
3. Selvas

QIV.B Distinguish between the following. State any two points of difference for each. Draw columns.

[8]

1. Spring tide and Neap tide
2. Intrusive Rock and Extrusive Rock
3. Pampas and llanos
4. Atacama Desert and Patagonian Desert.

QV. Answer the following questions:

1. Name the major layers of the earth. [1½]
2. What is Eurasia? [2]
3. Describe the La Plata river system? [2]
4. List any two most industrialised nations of South America. Support your answer with a reason each. [2]
5. State the location of the west coastal plains. [2]

QVI. Give Geographical reason for the following:

1. Only about 10% of the land in South America is under cultivation. [2]
2. Cattle are raised in the pampas region of South America. [2]
3. The Amazon basin is not economically important. [3]
4. Atmosphere is an important realm of the Earth. [3]

QVII.A Draw a neat labelled diagram showing 'Convectional Rainfall'.

[3]

QVII.B On the given outlined map of South America mark the following:

[9]

1. **Countries:**

- a. Largest country
- b. Uruguay
- c. Ecuador

3. **Capitals**

- a. Buenos Aires
- b. Georgetown
- c. Santiago

2. **Water bodies:**

- a. Caribbean Sea
- b. Pacific Ocean
- c. Southern Ocean

5. Cape Horn


6. Isthmus of Panama

7. The two important latitude lines that pass through South America.

8. Region:

- a. Atacama Desert
- b. Pampas
- c. Gran Chaco
- 9. The Eastern Highland

QVII.C Identify the picture 1 and 2 from wildlife and 3 and 4 from the forest resources. Name any one area where it is found. State one use of it. [6]




QVIII.A Names of some countries of South America are given below, write the names of the main mineral found there: [2]

- 1. Brazil
- 2. Venezuela
- 3. Chile
- 4. Bolivia

QVIII.B Classify the following rocks into igneous, sedimentary and metamorphic rocks. Draw columns. [5]

[shale; granite; coal; marble; chalk; basalt; slate; graphite; pumic; gypsum]

QVIII.C Observe the picture and answer the questions that follow:

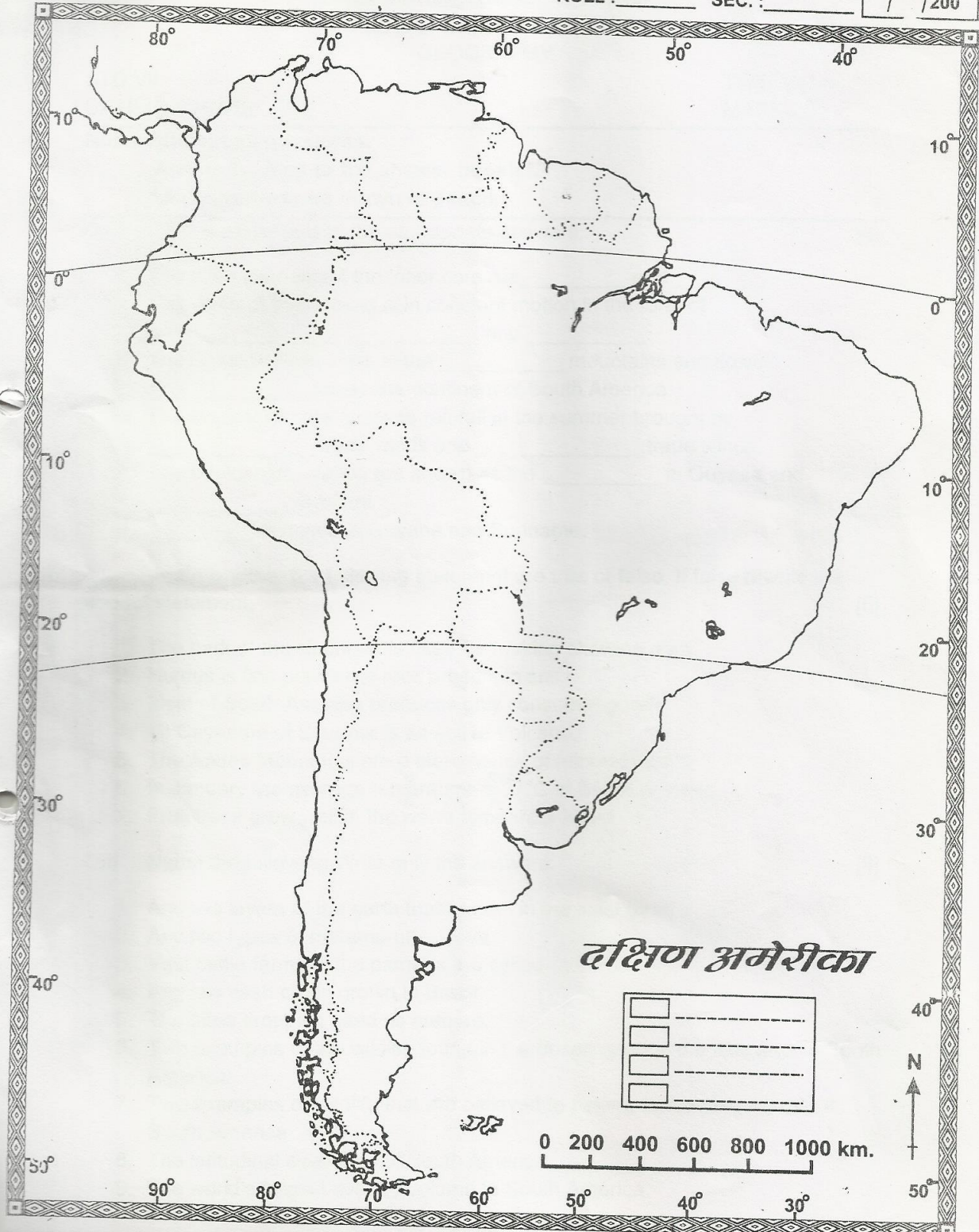


- 1. Name the type of forest in the above picture. [½]
- 2. State the climate features of this region. [any two points] [1]
- 3. What kind of wildlife is found in this forest? Give one example. [1½]

SOUTH AMERICA POLITICAL

NAME : _____
STD. : _____ DIV. : _____
ROLL : _____ SEC. : _____

DATE
/ / 200



दक्षिण अमेरीका

MARKS /

FOR EDUCATIONAL PURPOSE ONLY

TEACHER'S SIGN.: _____