

GREENLAWNS SCHOOL, WORLI
TERMINAL EXAMINATION – 2020
GENERAL KNOWLEDGE

Std : VI
Date: 18/09/19

Marks : 20
Time: 30mins

Q I] Name the country where the following monuments are found: (3)

- 1) St. Basil's Cathedral –
- 2) Mecca –
- 3) The Golden Temple –

Q II] Fill in the blanks. (3)

- 1) The _____ Tissue forms the main components of the brain and spinal cord.
- 2) The tissue that provides shape and support to the different organs is the _____ Tissue.
- 3) A person is capable of generating movement like walking and running due to the _____ Tissue.

Q III] Choose the animals that are found in the following sanctuaries. (3)

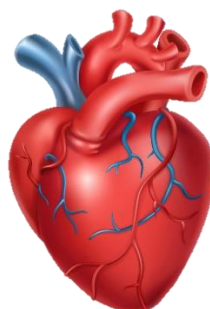
- 1) Kaziranga National Park, Assam –
 - a) Asiatic Lion
 - b) One Horned Rhinoceros
- 2) Jim Corbett National Park –
 - a) Bengal Tiger
 - b) Indian Bison
- 3) Silent Valley National Park –
 - a) Red Panda
 - b) Long-Tailed Macaque

Q IV] Answer the following in one sentence only. (5)

- 1) What will a tourist find in the King's Chamber at the Pyramids of Giza?
- 2) Mention the most striking feature of an adult male blackbuck.
- 3) State the function of the stomach.
- 4) What importance did the watchtowers have on the Great Wall of China?
- 5) Mention two activities that have endangered the species of the Nilgiri Tahr.

Q V] Do as directed. (6)

Q] Observe the picture and answer the question that follows:



- 1) State the function of the above organ.

Q] Observe the picture and answer the question that follows:



2) State the habitat of this animal.

Q] Observe the picture and answer the question that follows:



3) Name the sculptor who designed this monument.

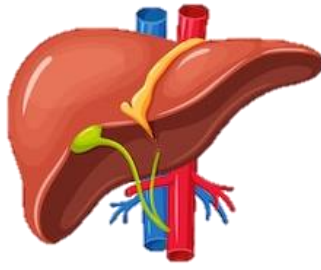
- a) Donatello
- b) Michelangelo
- c) Picasso

Q] Observe the picture and answer the question that follows:




4) State another name for the Kashmir Red Stag seen in the above picture. Mention the special feature of its antlers.

Q] Observe the picture and answer the question that follows:



5) Identify the above image.

Q] Observe the picture and answer the question that follows:



6) State the original name for this monument.

-----XXXXXXXXXX-----