

**GREENLAWNS HIGH SCHOOL**  
**TERMINAL EXAMINATION YEAR 2019**

**SUBJECT : GEOGRAPHY**  
**TIME : 1 ½ HOURS**

**CLASS : VII**  
**MARKS : 80**

-----  
(Detach this sheet and attach it to the main answer booklet)

Name : \_\_\_\_\_ Std/Div: \_\_\_\_\_ Roll No: \_\_\_\_\_

I Name the following. (5)

1. An automatic thermometer used for continuous recording of temperature - \_\_\_\_\_
2. Two types of barometers used for measuring air pressure - \_\_\_\_\_  
and \_\_\_\_\_.
3. Two forms of precipitation - \_\_\_\_\_ and \_\_\_\_\_.
4. Drizzle caused by stratus clouds formed at low levels - \_\_\_\_\_.
5. An instrument used to measure the speed of wind - \_\_\_\_\_.
6. The smallest country in Europe - \_\_\_\_\_.
7. A mountain range in the south-west of Europe - \_\_\_\_\_.
8. The second largest river in United Kingdom: \_\_\_\_\_.

II Match the following and write the answers in Column C. (4)

A	B	C
1. Benelux	a. Baltic State	
2. Poland	b. Temperate grasslands	
3. Irish Republic	c. Frigid zone	
4. Ardennes	d. Lowland countries	
5. Latvia	e. Taiga forest belt	
6. Lumbering	f. Warsaw	
7. Steppes	g. Central Uplands	
8. Tundra Climate	h. British Isles	
	i. Temperate zone	

III Define following:

1. Isotherms: \_\_\_\_\_ (5)  
 \_\_\_\_\_ (2)

---



---

2. Relative humidity :

\_\_\_\_\_ (2)  
 \_\_\_\_\_

---



---

3. Temperature :

\_\_\_\_\_ (1)  
 \_\_\_\_\_

---



---



---

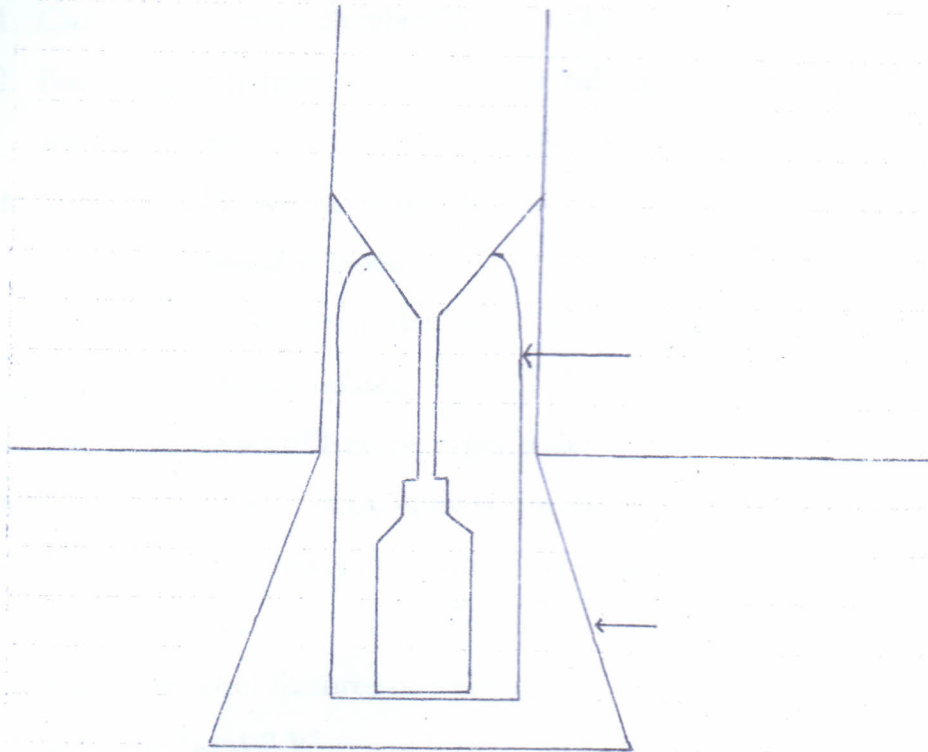


---

1. Barometer	_____
2. Hygrometer	_____
3. Anemometer	_____
4. Thermometer	_____
5. Windmill	_____
6. Rain gauge	_____
7. Wind vane	_____
8. Trawl net	_____

IV Picture study.

(5)



1. Identify the instrument. What is it used for? (1)

---

---

2. Where is it installed and why? (2)

---

---

---

3. What is used to measure the collected water? (1/2)

---

4. How are the recordings taken? (1 1/2)

---

(All answers to be written in the answer booklet)

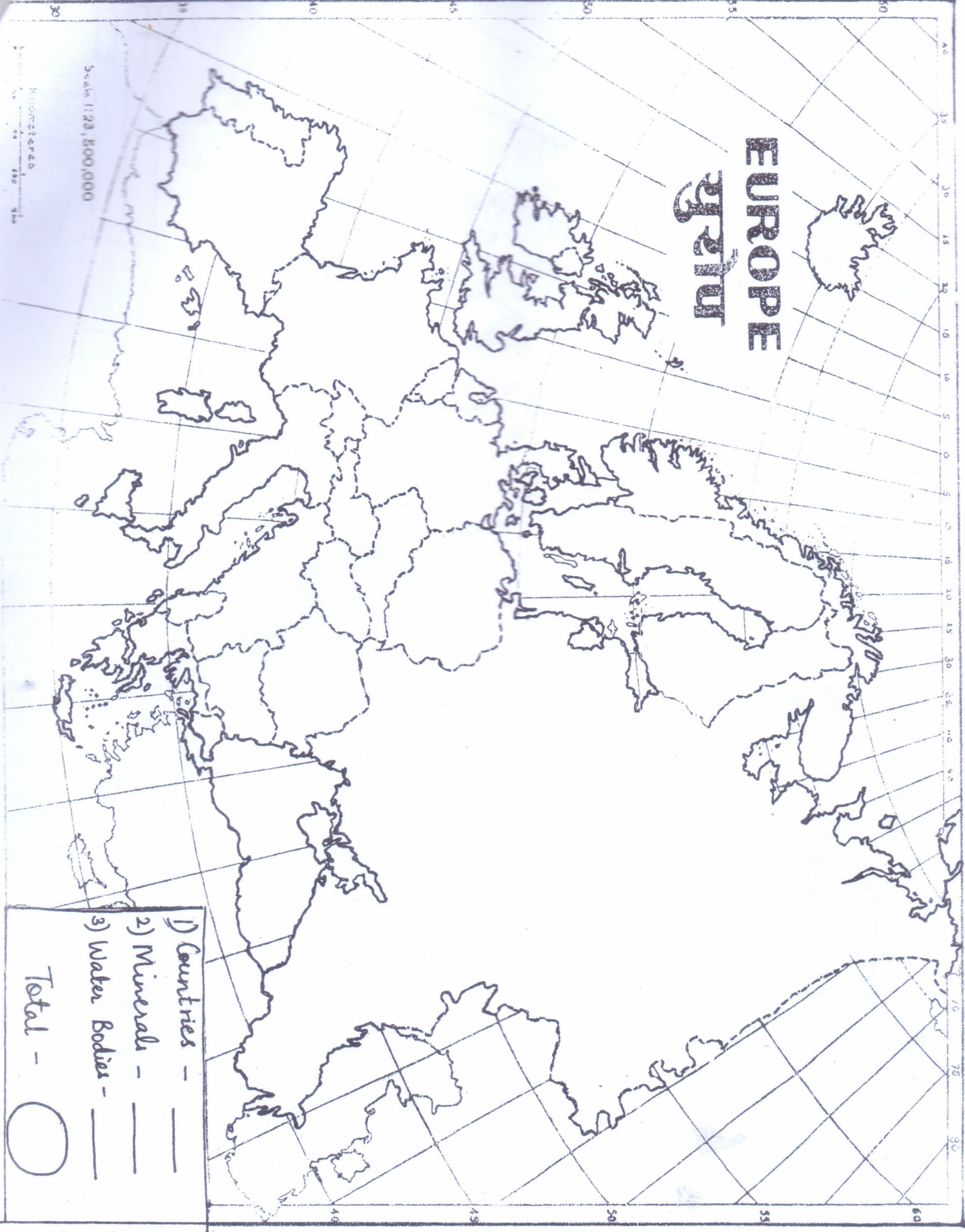
- V Distinguish between: (6)
1. Cirrus and Nimbus clouds (2)
  2. Forest based Industry and Chemical Industry (on the basis of any 2 regions and products) (2)
  3. Intensive and Extensive farming (2)
- VI Give geographical reasons: (10)
1. Europe is also known as the 'Peninsula of Peninsulas'. (2)
  2. Europe is ideal for fishing. (2)
  3. The Eastern part of Europe experiences extreme temperatures. (2)
  4. The distribution of population in Europe is uneven. (2)
  5. Thermometers are kept in a white Stevenson's Screen. (2)
- VII Answer in brief: (14)
1. Name the relief features of Europe. (2)
  2. What are fjords? Where in Europe are they found? (2)
  3. Give the natural extent of the Alpine Mountain system. (2)
  4. Why is the extension of the Gulf Stream (the North Atlantic Drift) important?(2)
  5. Mention the characteristics of the Tundra type of climate. (2)
  6. Name four animals found in the Marine type of Climate. (2)
  7. Why is Europe considered one of the most developed continents? (2)
- VIII With reference to agriculture in Europe, answer the following: (3)
1. What is mixed farming? (1)
  2. Why are grapes produced? (1)
  3. What is market gardening? (1)
- IX With reference to tourism in Switzerland, answer the following: (3)
1. Saas Fee – in Switzerland has been given its distinctive name ' Pearl of the Alps'. (1)
  2. What are the two main activities that draw tourists to Switzerland's Alps? (1)
  3. Which is Switzerland's most visited attraction with an entrance fee? (1)



- X Map Work: (25)
- A On the given political map of Europe, label, mark and shade the following: (13)
- I Countries and Capitals (5)
1. Ireland 2. Spain 3. Greece 4. Norway 5. Austria
- II Minerals (5)
1. Iron Ore 2. Coal 3. Petroleum 4. Zinc 5. Lead
- III Waterbodies (3)
1. Caspian Sea 2. Bay of Biscay 3. Gulf of Finland 4. Strait of Dover  
5. Sea of Azov 6. Strait of Gibraltar
- B On the given map of Europe label, mark and shade the following. (12)
- I Balkan Peninsula (1)
- II Rivers: (3)
1. R. Ebro 2. R. Rhine 3. R. Elbe 4. R. Seine 5. R. Vistula 6. R. Don
- III Mountains: (4)
1. Ural 2. Cantabrian 3. Alps 4. Mt. Blanc
- IV Vegetation: (2)
1. An area with Tundra Vegetation  
2. An island in western Europe which has mixed vegetation.
- V Climate: (2)
1. The climate experience by the Italian Peninsula.  
2. an area with very less rainfall.

\*\*\*\*\*

# EUROPE युरोप



Scale 1:28,800,000

Kilometers 0 100 200

1) Countries -	_____
2) Minerals -	_____
3) Water Bodies -	_____
Total -	○

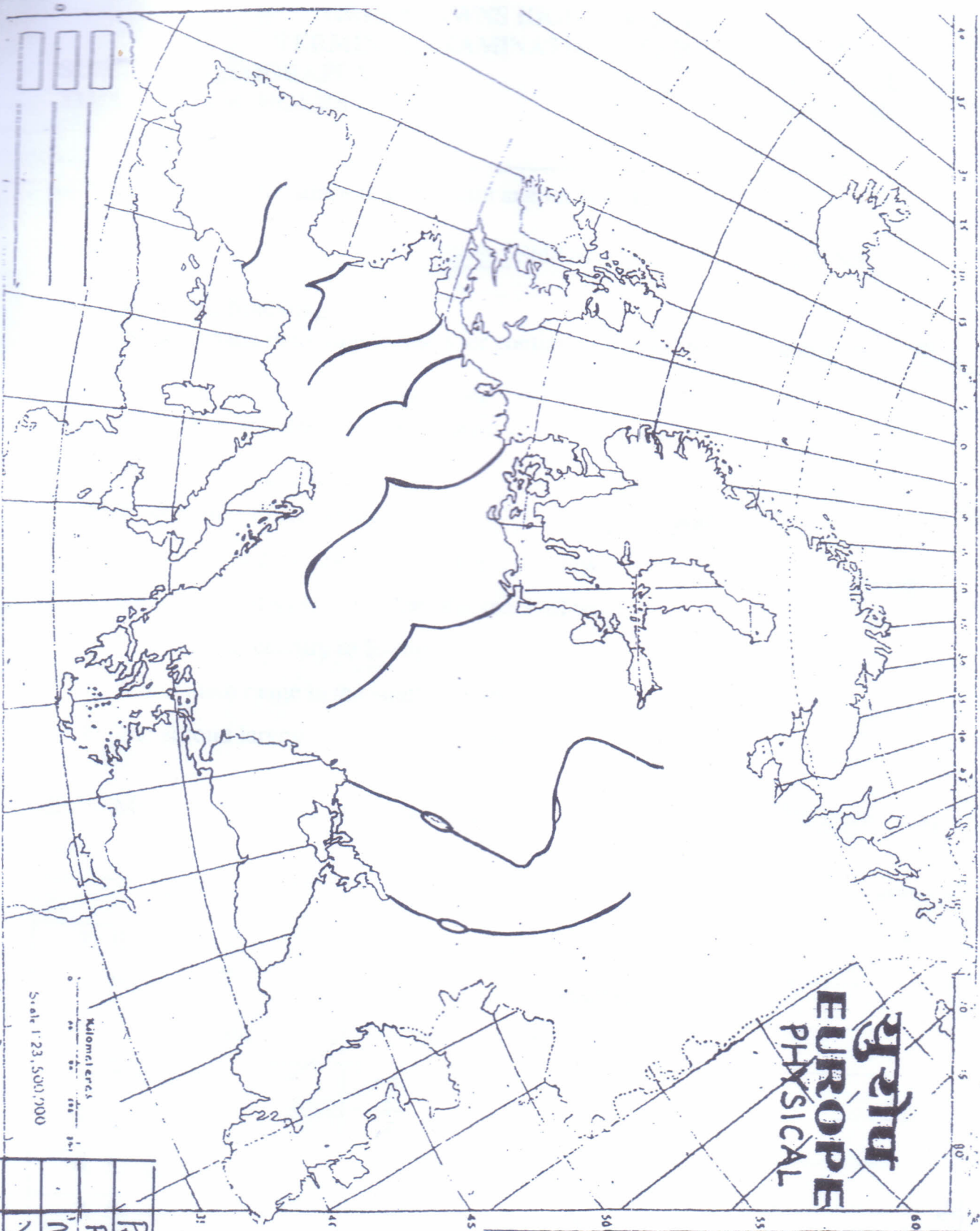


Name: \_\_\_\_\_

Std/Div: \_\_\_\_\_

Roll no: \_\_\_\_\_

Map - II



Peninsula
Rivers
Mts
Vegetation
Climate

Total