

GREENLAWNS HIGH SCHOOL
FINAL EXAMINATION YEAR 2020

SUBJECT: Social Studies
TIME: 1 ½ HOURS

CLASS: V
MARKS: 80

Please note: Answer Section A on the Worksheet itself. SECTION B to be done on the Map sheet attached. All the answers to Section C to be written in the answer booklet. Detach Section A and the Map and attach it to your main Answer sheet.

SECTION A – Worksheet

I Fill in the blanks:

[5]

- 1) The _____ is in charge of making sure that elections are conducted in a free and fair manner.
- 2) Kharif crops are grown in _____ and harvested at the end of the _____.
- 3) _____ are domesticated for milk and transport in the desert.
- 4) In India, elections are conducted on the basis of universal _____.
- 5) _____ has led to all round development in the agriculture sector of India since 1958.
- 6) In mountains, _____ are dug through hills to make roads.
- 7) _____ performs the same task as radio, but also shows pictures.
- 8) _____ is possible through modern communication, trade and migration of people.
- 9) _____ can affect the development of brain in children and damage the kidneys in adults.

II Match the following and give the option in the box given below:

[5]

1) Protecting animals	a) Paper industry
2) Internet	b) Series of tidal waves
3) Political parties	c) Growing of crops
4) Government telephone company	d) Countries become interdependent
5) Tsunami	e) Pass laws against poaching
6) Globalization	f) Process of planting healthy seeds
7) Metro Trains	g) Helps candidates with their election campaign
8) Cultivation	h) Bharat Sanchar Nigam Ltd
9) Sowing	i) Elevated tracks or under the ground
10) Forest based industries	j) Send/receive messages or information instantly

1)-	2) -	3) -	4) -	5)-	6)-	7)-	8)-	9)-	10)-
-----	------	------	------	-----	-----	-----	-----	-----	------

III Write True or False and correct the false statement:

[5]

1) Farmers use fertilizers to kill the pests.

Ans: _____

2) Films entertain and educate the people.

Ans: _____

3) Air transport is the slowest and the most expensive means of transport.

Ans: _____

4) Industrial development is affecting soil, water and air resources.:

Ans: _____

5) Large scale industries are set up by people in their own homes.

Ans: _____

6) Non-renewable resources are available in plenty and can renew on their own.

Ans: _____

IV Pick the correct answer and fill in the blank:

[2]

1) _____ energy is an example of renewable energy.

- a) coal b) petroleum c) wind d) Fossil fuels

2) In ancient times, people travelled _____

- a) on foot b) on the back of animals c) using animal-carts d) all of the above.

3) We may receive _____ transmission by installing a satellite dish at our homes.

- a) antenna b) Direct to Home(DTH) c) Cable TV d) Doordarshan

4) _____ soil is the best for jute production.

- a) Alluvial b) Black c) gloomy d) clay

V Give one example each for the terms given below:

[3]

- 1) Organisms who make their own food directly from the environment: _____
- 2) Instrument used to measure and record details of earthquake : _____
- 3) Expensive waterways which takes tourist from one destination to another: _____
- 4) Indian railways which supports the Indian Postal Administration in quick delivery of letters and parcel:

- 5) Fuel used in heavy vehicles such as trucks, ships and buses: _____
- 6) Single crop grown which are called plantation crop: _____

Section B (Map)

VI On the given map of India mark the following with coloured pencils:

[10]

1) Tea	6) Sugarcane
2) Engineer Industries	7) Spices
3) Millet	8) Ship building
4) Oilseeds	9) Jute
5) Cotton	10) Rice

Section 'C

VII Define the terms:


[10]

- 1) Model Code of Conduct: [2]
- 2) Fertilizer : [2]
- 3) Global warming: [2]
- 4) Drought: [2]
- 5) Election campaign: [1]
- 6) Epicenter : [1]

VIII Picture Study:

[20]

- 1)
 - a) Identify the picture given. [1/2]
 - b) Where are the above machines kept during elections? [1]
 - c) State the process of voting in India? [1/2]
 - d) How does the machine help in election? [1]
 - e) What process follows after the voting is over? [2]



2)

- a) Name the Print media shown in the picture.
- b) What does the print media consist of?
- c) Give two advantages of the given print media.
- d) Classify the means of communication used in this media.
- e) Name any one example of the given print media

[1/2]

[1]

[2]

[1]

[1/2]



3)


- a) Identify the picture given
- b) What is meant by greenhouse effect?
- c) State any one problem caused by the phenomenon mention above.
- d) List down any two solutions to solve the effects caused by above.

[1]

[1]

[1]

[2]




4)

- a) How does this natural disaster occur?
- b) What happens on the surface of the earth during the given natural disaster?
- c) Mention the types of this natural disaster. Give one example of each.

[1]

[1]

[3]



IX Answer the questions given below:

[20]

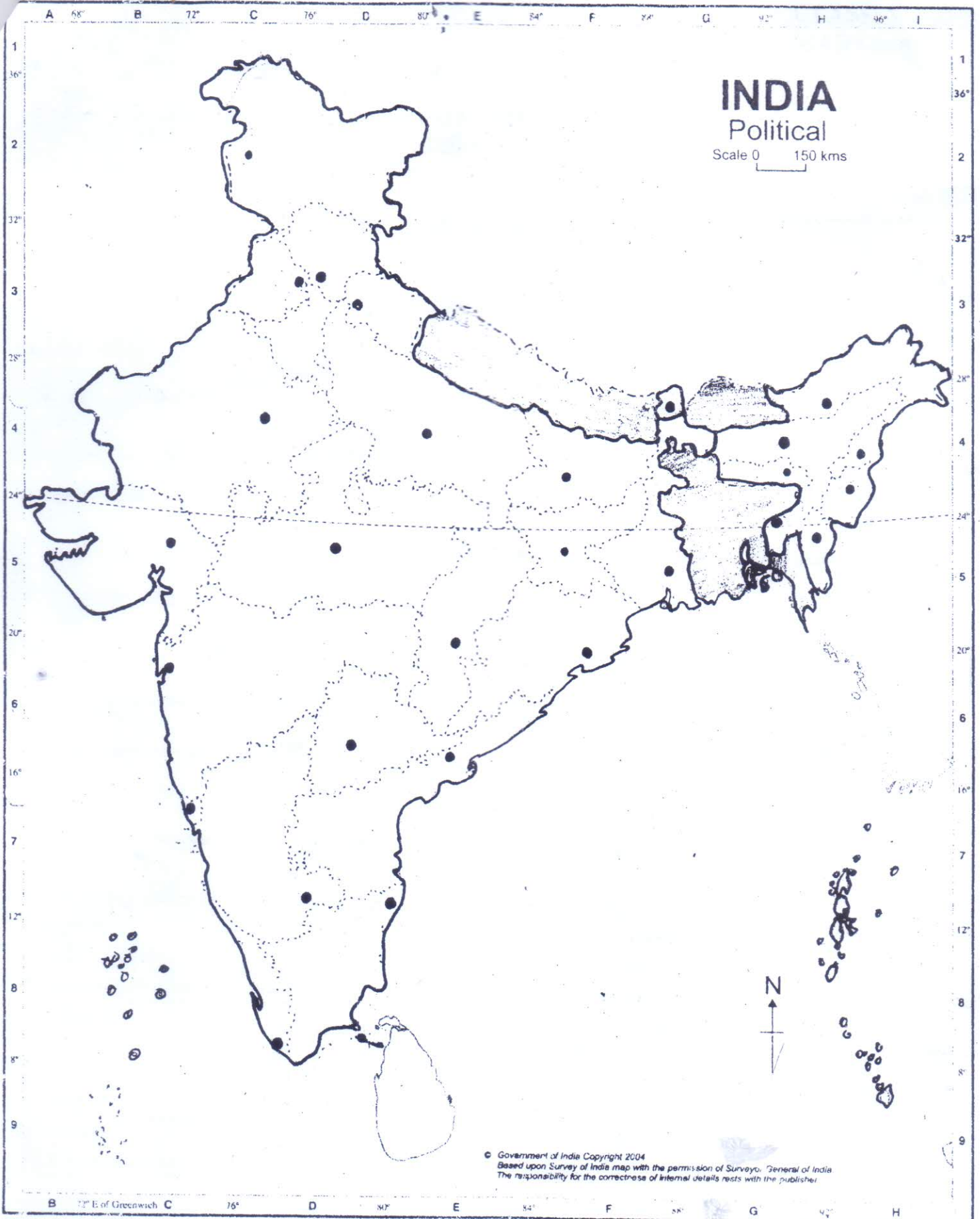
- 1) Explain the various means of communication used? Give any one example of each. [3]
- 2) State the advantages of Globalization? [3]
- 3) What is the role of the Election Commission of India? Mention any three points. [3]
- 4) Suggest any three ways in which air pollution can be controlled. [3]
- 5) What does campaigning include? [2]
- 6) Explain the term Democracy? [2]
- 7) How are floods caused? [2]
- 8) What are the effects of deforestation? [2]

NAME:-

STD:-

DIV:-

DATE:-



INDIA

Political

Scale 0 150 kms

© Government of India Copyright 2004
Based upon Survey of India map with the permission of Surveyor General of India
The responsibility for the correctness of internal details rests with the publisher.

Scale : 1 : 15,000,000 (1cm = 150kms)