

**GREENLAWNS HIGH SCHOOL
FINAL EXAMINATION 2023-24**

**SUBJECT: SOCIAL STUDIES
TIME: 2 HOURS**

**CLASS: V
MARKS: 80**

INSTRUCTIONS: All the answers to be written in the answer booklet **ONLY**.

**SECTION I
HISTORY & CIVICS**

Q.1) Choose the correct option.

(6m)



1. Iron was used for making _____ for turning and digging the soil.
a. Sickles b. Spears c. Ploughshares d. Arrows
2. Early humans began writing with pens made of _____.
a. Bamboo b. Reed c. Pen d. Lead
3. The process through which a leader is chosen is called _____.
a. Democracy b. Citizenship c. Election d. Constitution
4. Nails and _____ were made by ironsmiths during the iron age.
a. Rivets b. Tools c. Hammers d. Saw
5. _____ means sharing ideas and information with one another.
a. Talking b. Technology c. Language d. Communication
6. A _____ is group of people who have the same political beliefs.
a. Political Party b. Lok Sabha c. Rajya Sabha d. Constitution



Q.2) Match the column.**(3m)**

INVENTION	HOW DOES IT HELP?
1. Radio	a. A machine that leaves an impression of letters on paper when the user presses a key to type letters or notes.
2. Telegraph	b. It was established so that people could send letters, parcels and even money.
3. Television	c. A machine through which information or a message can be transmitted in the form of sound waves.
4. Typewriter	d. A method of sending messages quickly using an electrical connection.
5. Telephone	e. A means of mass communication used for delivering information and for entertainment in the form of audio and visuals.
6. Post Offices	f. An instrument using which people can talk to one another.

Answers - 1- _____, 2- _____, 3- _____, 4- _____, 5- _____, 6- _____

Q.3) Complete the blanks in the following table.**(4m)**

PICTURE	NAME OF THE EXPLORER	ACHIEVEMENTS
	1. _____	First explorer to complete a circumnavigation of the Earth.
	2. _____	Italian Explorer who travelled from Europe to Asia and lived in China for 17 years.

	<p>3. _____</p>	<p>First person to discover the sea route to India.</p>
	<p>4. _____</p>	<p>Italian explorer and admiral who led four voyages.</p>

Q.4) Unscramble the following with reference to the modern means of communication.

(3m)

1. tapolsp
2. taletails
3. ioebml

Q.5) State whether the following statements are True or False.

(4m)

1. Bronze was softer than iron.
2. The Egyptians used a system of writing called hieroglyphics.
3. The party that wins the maximum number of votes is called the opposition party.
4. A speed post helps to deliver letters faster.

Q.6) Observe the given image carefully and answer the questions that follow. (5m)



1. What does the above picture depict? (2m)
2. Who has the right to undertake the above process? (2m)
3. Why do you think the above process is important? (1m)

Q.7) Answer the following questions. (15m)

1. State any two features of a democracy. (2m)
2. Which list consists of powers shared by both the central and the state governments?
State two examples of the departments included under the list. (2m)
3. Mention any one difference between The Lok Sabha and The Rajya Sabha.(Write in tabular form) (2m)
4. What caused wars among the people during iron age? Which weapons were made during iron age? (2m)
5. Write one example each of personal communication and mass communication. (2m)
6. Mention any two responsibilities of a citizen? (2m)
7. How were the pigeons used to carry and return messages in ancient times? (3m)

INSTRUCTIONS: All the answers to be written in the answer booklet **ONLY**.

SECTION II
GEOGRAPHY

Q.1) Choose the correct option. (Do not copy the question. Only write the correct option) (5m)

1. _____ is the coldest month in India.
a. December b. January c. February d. March
2. During _____ season, new leaves start appearing on the trees.
a. Winter b. Summer c. Autumn d. Spring
3. A large variety of fruits are cultivated in fruit farms called _____.
a. Plantations b. Orchards c. Gardens d. Fields
4. In Japan, cyclones are known as _____.
a. Eruptions b. Hurricanes c. Storms d. Typhoons
5. A hot and dry wind _____ blows over northern India during _____ summers.
a. Nor'Westers b. Loo c. Easterlies d. Westerlies

Q.2) Match the column. (One example is already done for you. Eg. 4-d) (3m)

DISASTER	DEFINITION
1. Droughts	a. Very strong tropical storms caused by fast-blowing rotating winds.
2. Cyclones	b. Occur when excess water collects in water bodies and subsequently flows into the surrounding areas.
3. Floods	c. Long periods of very low rainfall.
4. India	5. Delhi

Answers - 1- _____, 2- _____, 3- _____

Q.3) State whether the following statements are True or False. If false correct the statement. (3m)

1. Autumn season is experienced mostly from October to December.
2. India is the second-largest producer of rice and tea in the world.

3. During the floods, it is not necessary to listen to the floods warnings on the radio and television.

Q.4) Complete the blanks in the following table. (Do not copy the table. Only write the correct answers in the answer booklet.) (4m)

CROP	LEADING PRODUCER STATE	TYPE OF SOIL
Sugarcane	Uttar Pradesh	1. _____
Tea	2. _____	Fertile mountain soil rich in humus.
Cotton	Maharashtra	3. _____
Rice	4. _____	Clayey or loamy soil

Q.5) Observe the given image carefully and answer the questions that follow: (4m)



- Which natural disaster is shown in the above picture? (1m)
- What is the cause of the above disaster? (1m)
- What losses can occur due to the above disaster? (1m)
- Mention any one safety rule to be followed during this disaster. (1m)

Q.6) Differentiate between the following. (4m)

(Write in tabular form)

- Desert Climate and Mountain Climate. (With respect to summers)
- Sugarcane and Cotton (With respect to climate)

Q.7) Give reasons. (4m)

1. Mountain slopes are ideal for tea cultivation. (1m)
2. The rainy season is considered as a very important season in India. (1m)
3. Droughts cause great distress to the farmers. (1m)
4. The climate in different regions of India varies. (1m)

Q.8) Answer in one sentence only. (5m)

1. What happens to the land during the droughts?
2. Which satellites can help predict cyclones?
3. Name any two important sectors of livestock rearing in India.
4. Which two factors influence the climate of a place?
5. Which season is followed by the winter season?

Q.9) Answer in brief. (8m)

1. Mention **any two** safety rules that can be undertaken during floods.
2. What damages are caused due to Cyclones?
3. Mention **any two** effects of floods.
4. What are the ideal growing conditions for wheat during ripening and harvesting?