

GREENLAWNS HIGH SCHOOL

TERMINAL EXAMNITAION

SOCIAL STUDIES

STD: V

MARKS: 80

DATE: 29.09.25

DURATION: 2hrs

**PLEASE NOTE: All the answers must be written in the answer booklet only.**

**Q.I CHOOSE THE CORRECT ANSWER FROM THE OPTIONS GIVEN BELOW:**

(10)

1. Which metal was discovered first?  
a. Iron      b. Copper      c. Tin
2. Which stone was used for making sharp tools?  
a. Flint      b. Marble      c. Slate
3. Which tool was used to grind grain into flour?  
a. Iron chisel      b. Loom      c. Rotary quern
4. What did people use for sea travel in the Iron Age?  
a. Rafts      b. Dugouts      c. Canoes
5. Inventor of the electric telegraph machine was:  
a. Samuel Morse      b. Gutenberg      c. Charles Babbage
6. Which of the following places is likely to have a moderate climate?  
a. Rajasthan      b. Chennai      c. Delhi
7. Hill stations are cooler than flat lands. Which factors influences this?  
a. Altitude      b. Wind      c. Humidity
8. Which of the following does NOT influence climate?  
a. Distance from equator      b. Type of soil      c. Distance from the sea.
9. When does the Coromandel Coast receive rains?  
a. Monsoon      b. Summer      c. Winter



10. The hot winds that blow in summer:

- a. Loo      b. Bora      c. Foehn

Q.II STATE WHETHER THE FOLLOWING STATEMENTS ARE TRUE OR FALSE: (07)

1. Early man used animal skin for clothing.
2. Domestication of animals started in the Mesolithic Age.
3. Wrought iron is weaker than bronze.
4. The places far away from the sea experience an extreme climate.
5. The rays of the sun fall straight on the poles.
6. Water heats up and cools down faster than land.
7. The Western Desert experiences heavy rainfall in the month of April.

Q.III MATCH THE COLUMN: (03)

(Solve as per the example provided to you. 7= G, India= Delhi)

1. Arctic Circle	A. hot and humid
2. Torrid Zone	B. 66.5 N
3. Tropic of Cancer	C. 66.5 S
4. Antarctic Circle	D. Cold and snowy
5. Tropic of Capricorn	E. 23.5 N
6. Frigid Zone	F. 23.5 S
7. India	G. Delhi

Q. IV DIFFERENTIATE BETWEEN THE TWO: (MAKE A TABLE) (10)

1. Palaeolithic Age and Neolithic Age. (two points in each) (4)

2. Weather and Climate (one point in each) (2)


(With reference to only the definition)

3. Frigid Zone and Torrid Zone. (one point in each) (4)

(With reference to location and climate)



Q.V STUDY THE GIVEN PICTURES CAREFULLY AND ANSWER THE QUESTIONS WHICH FOLLOW: (10)



A.

1. The launch of which Indian satellite strengthened our communication system? (1)
2. How do the satellites help the meteorologists and the cartographers? (2)



B.



1. Identify the given image.
2. Whose intelligence led them to invent the above image?
3. How did the above tool help the early men?

(1)  
(1)  
(2)

c.

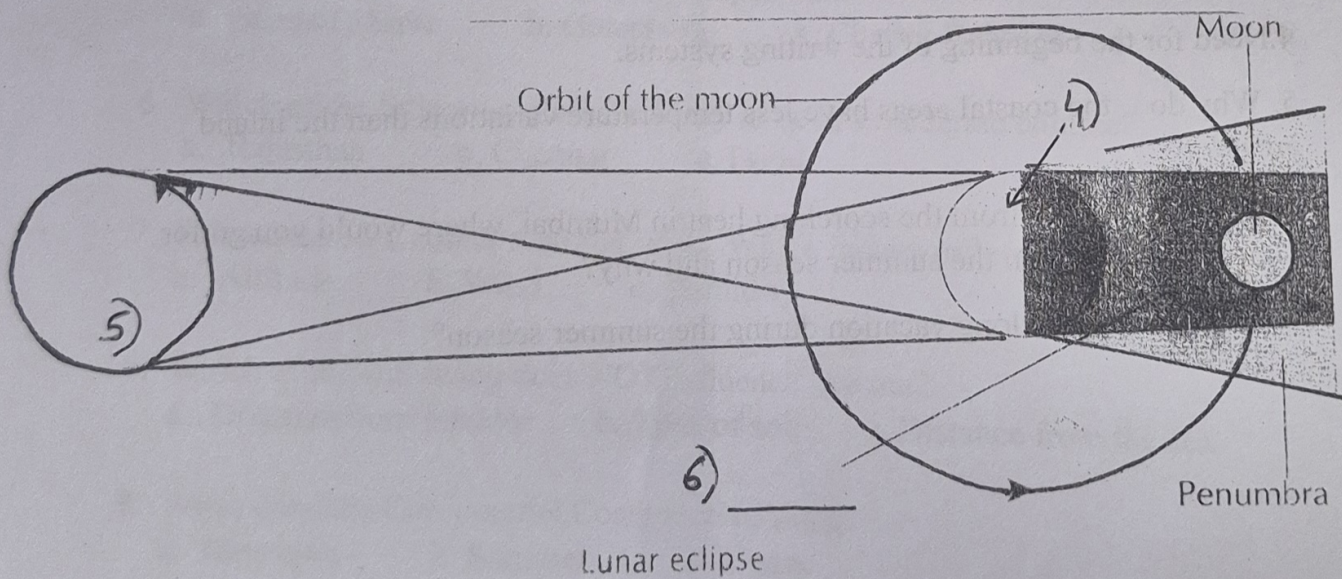
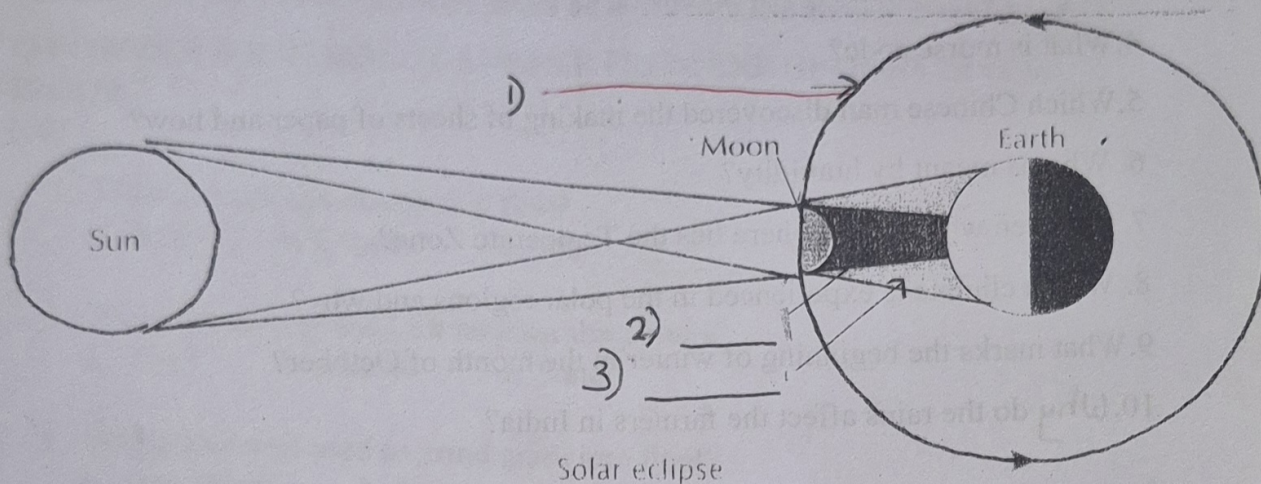


1. Identify the mode of transport in the above image:
2. Which two countries used the chariots?
3. What were they used for in the later classical era?

(1)  
(1)  
(1)



Q.VI OBSERVE THE IMAGE CAREFULLY AND LABEL THE  
 IMAGE AS PER THE NUMBERS MENTIONED IN THE BLANKS: (6)





Q. VII ANSWER THE FOLLOWING IN ONE OR TWO SENTENCES: (20)

1. What is a torc? Whom was it worn by ?
2. Explain how was fire used in a wider way in the New Stone Age?
3. Name the four Iron Age Weapons.
4. What is morse code?
5. Which Chinese man discovered the making of sheets of paper and how?
6. What is meant by humidity?
7. Between which hemisphere lies the Temperate Zone?
8. Which climate is experienced in the polar regions and why?
9. What marks the beginning of winter in the month of October?
10. Why do the rains affect the farmers in India?

Q. VIII GIVE REASONS:

(14)

1. Primitive man moved from place to place.
2. Iron Age was a violent period.
3. Printing press changed the world. Explain
4. Need for the beginning of the writing systems.
5. Why do the coastal areas have less temperature variations than the inland areas?
6. To save yourself from the scorching heat in Mumbai, where would you go for a vacation in India in the summer season and why?
7. Why do we get a long vacation during the summer season?