

GREENLAWNS HIGH SCHOOL
FINAL EXAMINATION 2020

SUBJECT: GEOGRAPHY
MARKS: 80

STD.: VI
TIME: 1 ½ HRS

NAME: _____ DIV.: A/ B/ C ROLL NO.: _____

SECTION A

[30 MARKS]

(Detach this section and attach it to the main answer booklet.)

I. Name the following:

[5]

1. Two lakes on either side of the Niagara Falls

2. Any two mountain ranges in the Appalachian Highlands

3. Any two animals found in the Taiga region in North America.

4. Two varieties of wheat harvested in North America

5. Any two agro-based industries found in North America

II. State whether the following statements are 'True' or 'False'. If false correct the underlined word and rewrite only the correct word.

[5]

1. Great Slave Lake is an area of inland drainage.

_____ ; _____

2. Sierra Nevada is the highest peak in North America.

_____ ; _____

3. Chaparral is a coarse grass that grows in the temperate climate.

_____ ; _____

4. Mexico is the leading producer of silver in the world.

_____ ; _____

5. Fredrick Terman is the founder of Hewlett-Packard.

_____ ; _____

III. Match the columns and write the answers in column C.

[4]

A	B	C
1. Greenland	a. Haiti	Example: 1-e
2. Capitol Hill	b. San Francisco	
3. Hoover Dam	c. Washington D.C.	
4. Golden Gate Bridge	d. River Colorado	
5. Nassau	e. Denmark	
6. Grand Coulee Dam	f. Appalachian Highlands	
7. Port Au Prince	g. The Bahamas	
8. Mount Mitchell	h. Yellowstone National Park	
9. Old Faithful Geyser	i. Nicaragua	
	j. River Columbia	


IV. Complete the following table giving one detail each:

[4]

	Climatic Type	Characteristic	Natural Vegetation
1.	Tundra	i. Summer: _____	ii. _____
2.	Taiga	i. Winter: _____	ii. _____
3.	Temperate (Continental)	i. Rainfall: _____	ii. _____
4.	Mediterranean	i. Summer: _____	ii. _____

V. Picture Study

A. Observe the picture given below and answer the questions that follow: [4]



1. Identify the desert. What is it named after? (1)

2. Mention any two regions across which it is spread. (1)

3. Name the two deserts located on either side of it. (1)

4. Name the lowest point found in the Western Hemisphere. What is the lowest temperature recorded in this region? (1)

B. Observe the picture given below and answer the questions that follow: [4]



1. Identify the man in the picture. To which group does he belong? (1)


2. Name two other groups of men who do this work. (1)

3. What is limbing? (1)

4. What happens to the logs finally? (1)

VI. Complete the Crossword Puzzle using the clues given below:

[4]



Across	Down
3. Number of time zones in North America (3)	1. Silicon Valley of India (9)
5. Six lane super-fast highways of North America (9)	2. Original inhabitants of Alaska (6)
6. Gorge carved by River Colorado (11)	4. Richest source of cod in Newfoundland (9)
8. Capital of Cuba (6)	7. Largest city in United States of America (7)

SECTION B**[25 MARKS]****(All answers to be written in the answer booklet only.)****VII. Give reasons for the following: [9]**

1. The Western Cordilleras have **many hot** springs and geysers. (1)
2. The California Current has had a **major** impact on the vegetation of North America. (1)
3. Fires are an important part of the **Prairie** ecosystem. (1)
4. Canada is vast but has low **population** density. (1)
5. Cuba is known as the 'Sugar Bowl of the World'. (1)
6. Heavy industries have developed **around** the Great Lakes region. (1)
7. U.S.A. built the Panama Canal. (1)
8. There is a dense fog near Newfoundland. (2)

VIII. Answer in brief: [16]

1. Explain why the Canadian Shield is **covered** with lakes. (2)
2. What is the 'Fall Line'? (2)
3. What is the main food of the **Mexicans**? What are its other uses? (2)
4. Where is cotton grown in U.S.A. and **Mexico**? What type of climatic conditions does it require for its growth? (2)
5. Name one of the busiest water ways of the world. What does this system consist of? (2)
6. With reference to the Navajos answer the following questions: (2)
 - i. Where do they live?
 - ii. Where did they come from?
 - iii. Mention any one animal that they hunted.
 - iv. Mention any one crop grown by them.
7. With reference to the Automobile industry of Detroit answer the following questions: (4)
 - i. Name the revolutionary concept that Henry Ford introduced in the automobile industry. (1)
 - ii. Explain how the availability of flat land contributed to the industry's development. (1^{1/2})
 - iii. How did the oil crisis and China affect the automobile industry in Detroit? (1^{1/2})

SECTION C**[25 MARKS]****IX. Map Work****A. On the given Political Map of North America, marked as 'MAP A', mark, label and shade the following: [13]****1. Countries and Capitals (4)**

- | | |
|---------------|------------|
| i. Canada | ii. Mexico |
| iii. Honduras | iv. Panama |

2. Islands (Yellow) (2)

- | | |
|------------------|------------------|
| i. Baffin Island | ii. Newfoundland |
| iii. Puerto Rico | iv. Vancouver |

3. Waterbodies (Blue) (4)

- | | |
|-------------------------|-------------------|
| i. Pacific Ocean | ii. Hudson Bay |
| iii. Gulf of California | iv. Bering Strait |
| v. Lake Great Bear | vi. Lake Superior |
| vii. Lake Michigan | viii. Lake Erie |

4. Minerals and Industries (Mark them as 'G', 'P', 'A') (3)

- | | |
|----------------|---------------|
| i. Gold | ii. Petroleum |
| iii. Air Craft | |

B. On the given Physical Map of North America, marked as 'MAP B', mark, label and shade the following: [12]**1. Rivers (Blue) (3)**

- | | |
|-------------------|-------------------|
| i. R. Mackenzie | ii. R. Athabasca |
| iii. R. Missouri | iv. R. Rio Grande |
| v. R. Mississippi | vi. R. Arkansas |

2. Mountains and Plateaus (Brown) (4)

- | | |
|----------------------|----------------------|
| i. Alaskan Range | ii. Rockies |
| iii. Canadian Shield | iv. Labrador Plateau |

3. Ocean Currents (2)

- | | |
|----------------------------|-----------------------------------|
| i. Labrador Current (Blue) | ii. North Atlantic Drift (Orange) |
|----------------------------|-----------------------------------|

4. South Westerlies (All Year Round) (Green) (1)**5. A peninsula receiving below 25 cm of rainfall. (Blue) (1)****6. A peninsula with Sub-Tropical and Tropical vegetation (Green) (1)**

91XA) MAP 'A' - POLITICAL

Name _____

Class/Div: _____

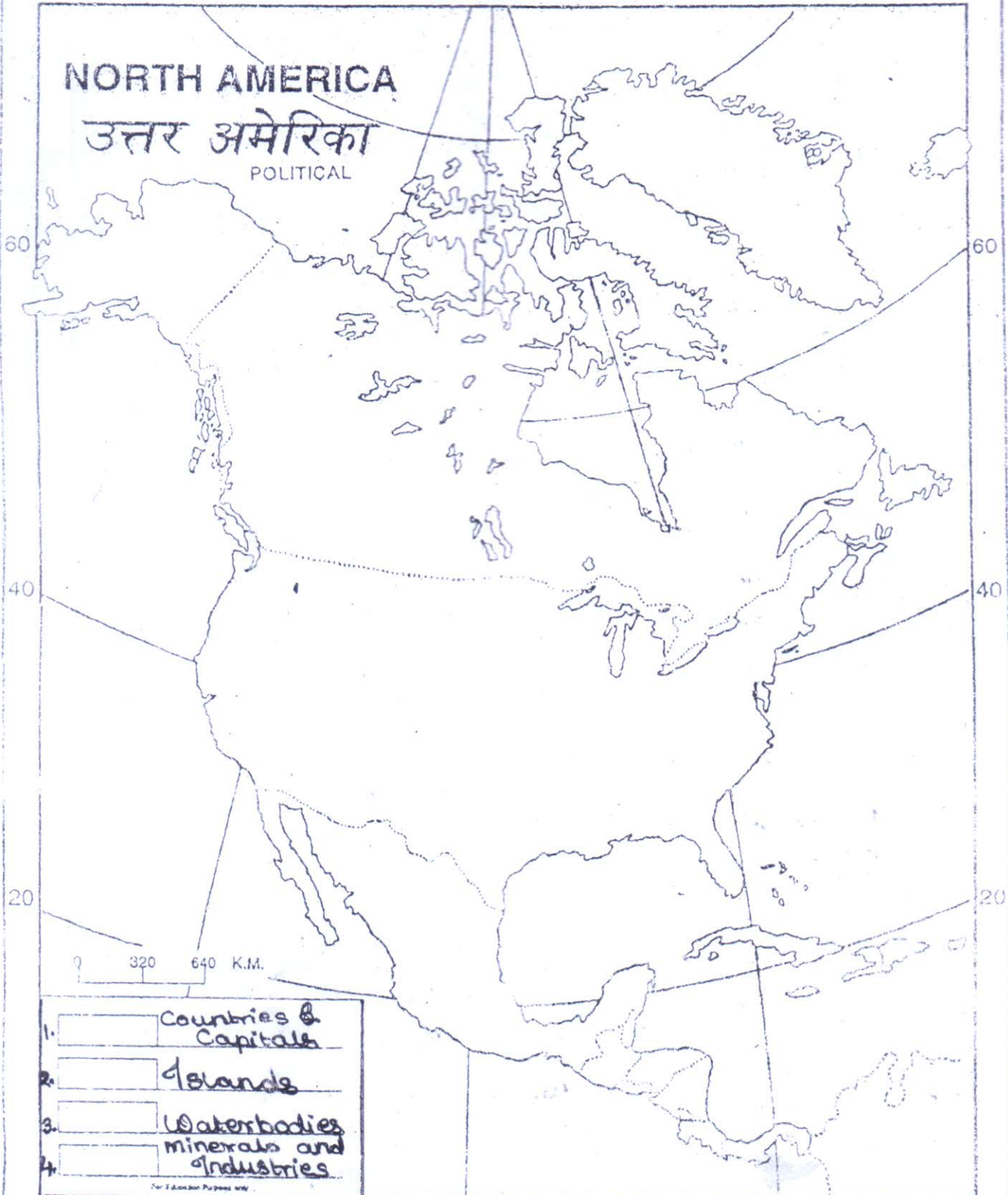
Roll No. _____

12010080

NORTH AMERICA

उत्तर अमेरिका

POLITICAL



- 1. Countries & Capitals
- 2. Islands
- 3. Waterbodies
- 4. minerals and Industries

120

100

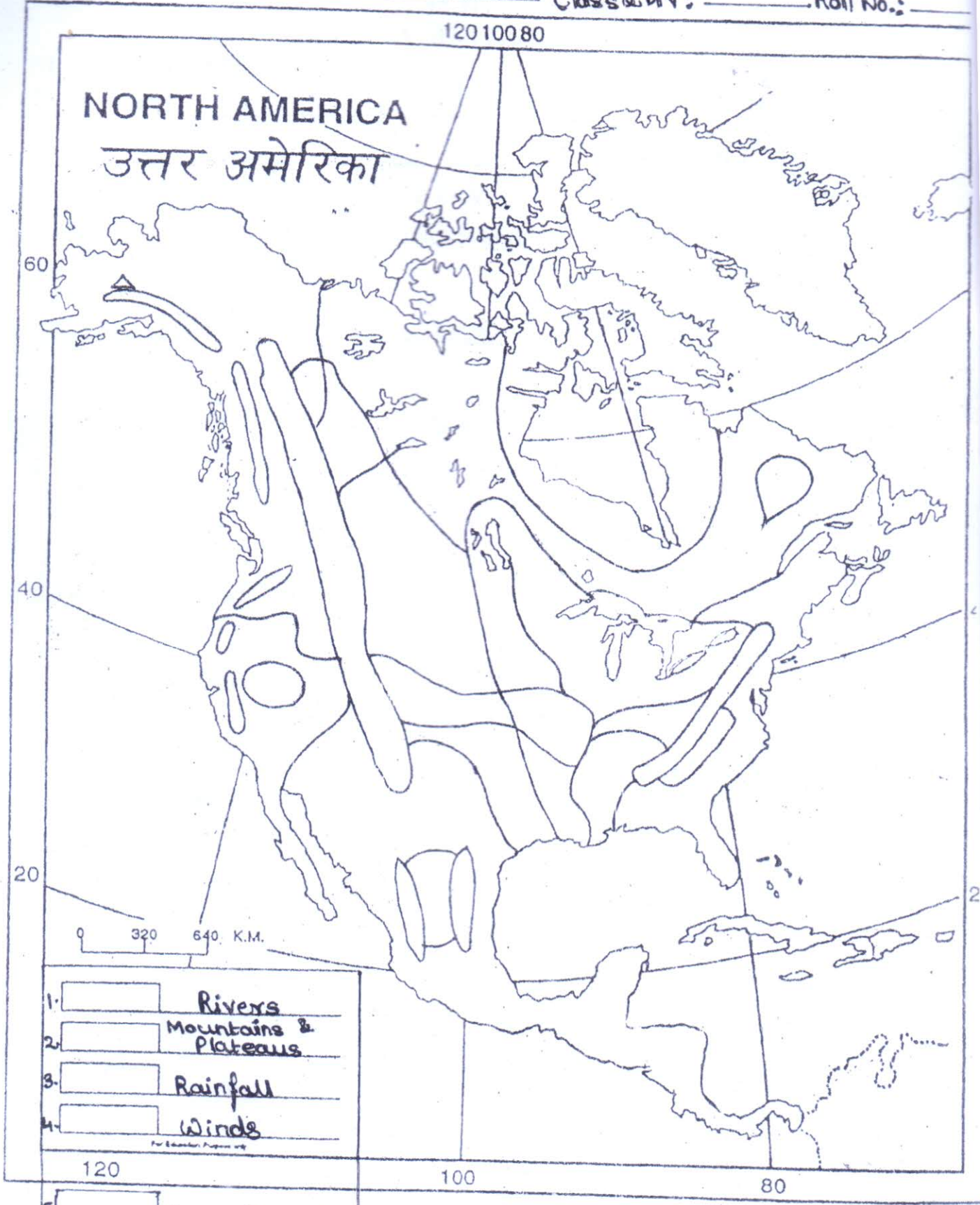
80



Name: _____

Class & Div: _____

Roll No.: _____



- 1. Rivers
 - 2. Mountains & Plateaus
 - 3. Rainfall
 - 4. Winds
 - 5. Ocean Currents
 - 6. Vegetation
- 