

**GREENLAWNS HIGH SCHOOL
FINAL EXAMINATION YEAR 2017-18**

**SUBJECT: GEOGRAPHY
TIME: 1 ½ HOURS**

**CLASS: VI
MARKS: 80**

You will not be allowed to write during the first 10 minutes.

This time is to be spent in reading the question paper.

The time given at the head of this paper is the time allowed for writing the answers.

Section 'A' to be answered on the paper.

NAME: _____ CLASS: _____ ROLL NO: _____

SECTION 'A'

Q.I. Fill in the blanks:

[5]

- 1) The _____ Islands along the north west coast appear to extend like a chain between the continents of Asia and North America.
- 2) The rainfall in North America is mainly caused by the _____ and the _____.
- 3) The _____ is the national bird of the United states of America.
- 4) Large scale wheat cultivation is practised in the prairies of the _____ and _____.
- 5) The Inuits are the original inhabitants of _____ and _____.
- 6) The _____ river is navigable upto St. Louis and is also connected by canals to the _____.

Q.II. Name the following:

[6]

- 1) The highest point of North Amercia.

- 2) Any two birds found in the Prairies.

- 3) Any two crops mainly grown for the purpose of feeding and fattening livestock.

- 4) Any two fishing banks of the east coast of North America in the Atlantic Ocean.

- 5) Any two places having large deposits of petroleum.

6) Two transcontinental railways in North America.

Q.III. Match the columns: (Do as shown in example) eg: 1- a

[5]

A

B

- | | |
|--|---|
| 1) Panama Canal | a) connects the Atlantic and Pacific ocean. |
| 2) Biggest hydroelectric plant | b) Ontario |
| 3) Washington D.C. | c) Stanford University |
| 4) Toronto is the capital of | d) is world famous for its beauty. |
| 5) Lumbering is carried out in | e) Mohave desert |
| 6) Silicon valley is located around | f) Pittsburgh |
| 7) The Grand Canyon | g) Spanish |
| 8) Coldest place in Canada | h) Lies along the bank of river Potomac |
| 9) Death valley lies in the | i) French |
| 10) The Iron & Steel capital of the world. | j) Canada |
| 11) The official language of Mexico. | k) Grand Coulee Dam on river Columbia. |
| | l) Snag in Yukon. |

Ans: 2- _____, 3- _____, 4- _____, 5- _____, 6- _____,

7- _____, 8- _____, 9- _____, 10- _____, 11- _____.

Q.IV. Complete the following table in detail: (Any 1 detail for each)

[4]

Sr.no.	Regions	Vegetation	Wildlife
1)	Tundra Vegetation		
2)	Prairies		
3)	Desert Vegetation		
4)	Tropical forests		

Q.V. Answer the following in a single sentence:

[5]

1) What are Cash Crops?

2) Give the extent of Central lowlands of North America.

3) Name any two factors that influence the climate of North America.

4) Who are African-Americans?

5) Explain the term 'skidders'.

Q.VI. Picture Study:

[5]



1) Identify the given picture.

1/2

2) Where is it located?

1/2

3) Name the city shown in the background of the picture.

1/2

4) Name the canal that connects this city with the Great lakes.

1/2

5) Name the islands that form the major part of the city.

1 1/2

6) Name any three industries found in this city.

1 1/2

SECTION 'B' (To be written on the Answer Script)

Q.VII. Give reasons [10]

- a) Piedmont Plateau is referred as the Fall line. (1)
- b) The Northern part of North America is colder than the southern part. (1)
- c) The Canadian Shield has many deep hollows or depressions. (2)
- d) 'Fur trapping' has given way to 'fur farming' and 'free farming' of fur bearing animals. (2)
- e) In winter cold winds from the Tundra region easily reach the interior. (2)
- f) Sawmills are set up near streams, rivers or waterfalls. (2)

Q.VIII. Answer in brief: [15]

- a) With reference to the Canadian Shield answer the following: (3)
 - Give its extent
 - What is it made up of?
 - Describe its appearance.
- b) Distinguish between deciduous and coniferous trees. (Any three points) (3)
- c) Mention three reasons for the development of the automobile industry around Detroit in the USA. (3)
- d) With reference to the Tropical Forests of North America. (3)
 - Name any two places where they are found.
 - Mention any two uses of these forests.
- e) i. How is paper pulp made? (3)
ii. What is recycling?

Q.IX. On Map 'A' mark, shade and name the following: [12]

- 1) Rivers (Blue) : R. Colorado, R. Rio Grande, R. Mackenzie, R. Ohio, R. St. Lawrence, R. Columbia. (3)
- 2) Mountains/ Plateau (Brown): Alaskan range, Mexican Plateau, Labrador Plateau, Canadian Shield. (4)
- 3) Rainfall (Blue): A region with 100-200 cm rainfall south of the continent. (1)
- 4) Currents: Cold Labrador Current. (2)
Warm Pacific Current.
- 5) Winds (Green): North East Trade Winds (1)
- 6) Vegetation (Orange): Meditteranean region (1)

Q.X. On Map 'B' mark, shade and name the following: [13]

1) Countries with their Capitals: (4)

- i. Mexico
- ii. Gautemala
- iii. Costa Rica
- iv. Panama

2) Islands (Yellow): (3)

- i. Baffin Island
- ii. Newfoundland
- iii. Vancouver
- iv. Jamaica
- v. Peurto Rico
- vi. Bahamas

3) Water Bodies(Blue): (2)

- i. Hudson Bay
- ii. Gulf of California
- iii. The Great Bear lake
- iv. Atlantic Ocean
- v. Bering Strait.

4) Minerals and Industries: (3)

- i. Copper
- ii. Air craft
- iii. Meat Packing

Q: 9

Map: A

NAME: _____

CLASS: _____

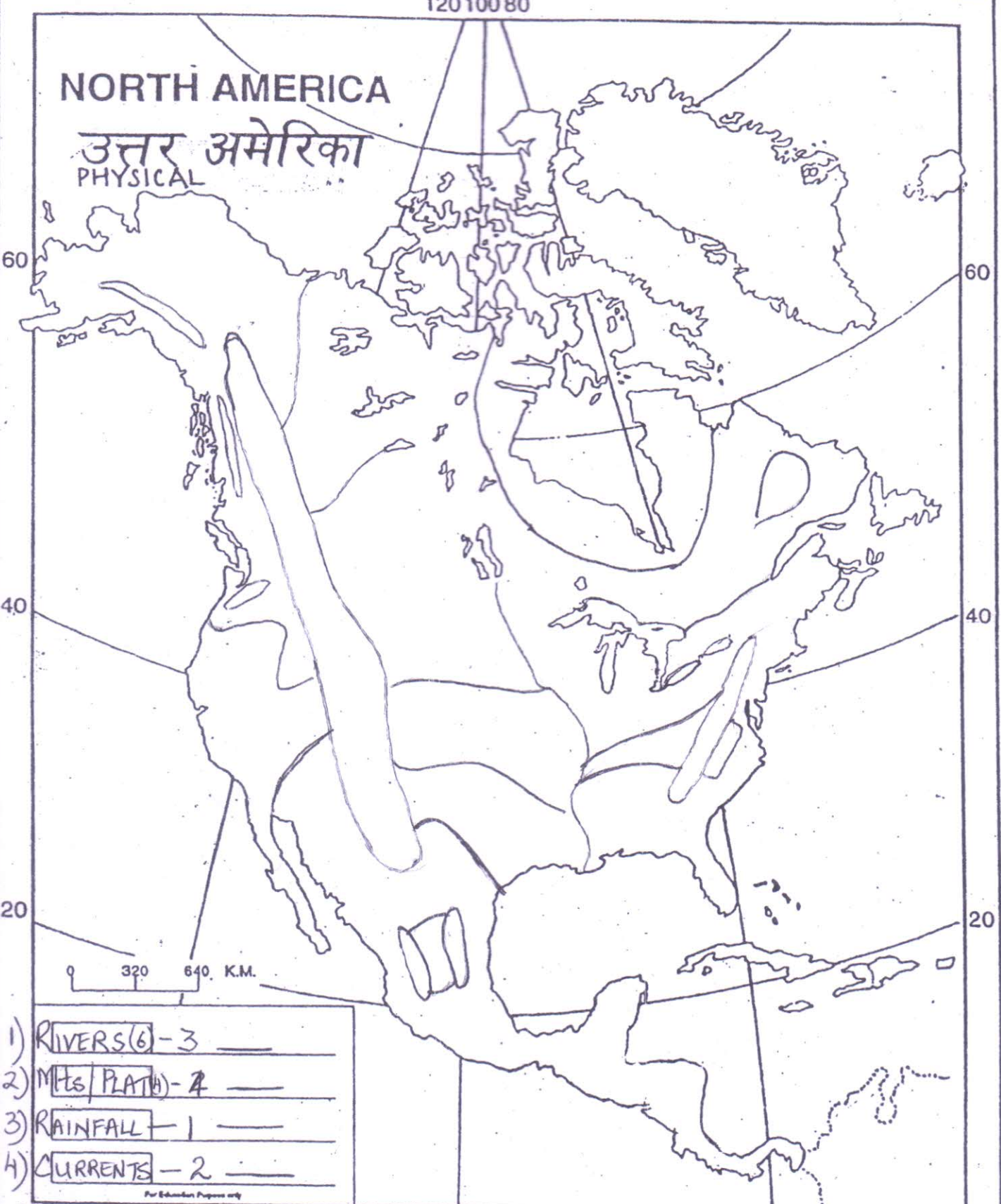
ROLL No _____

12010080

NORTH AMERICA

उत्तर अमेरिका

PHYSICAL




- 1) RIVERS (6) - 3 _____
- 2) Mts / PLATS - 4 _____
- 3) RAINFALL - 1 _____
- 4) CURRENTS - 2 _____

For Educational Purposes only

5) WINDS - 1 _____

6) VEG - 1 _____

TOTAL



Q: 10

Map: B.

NAME _____

CLASS: _____

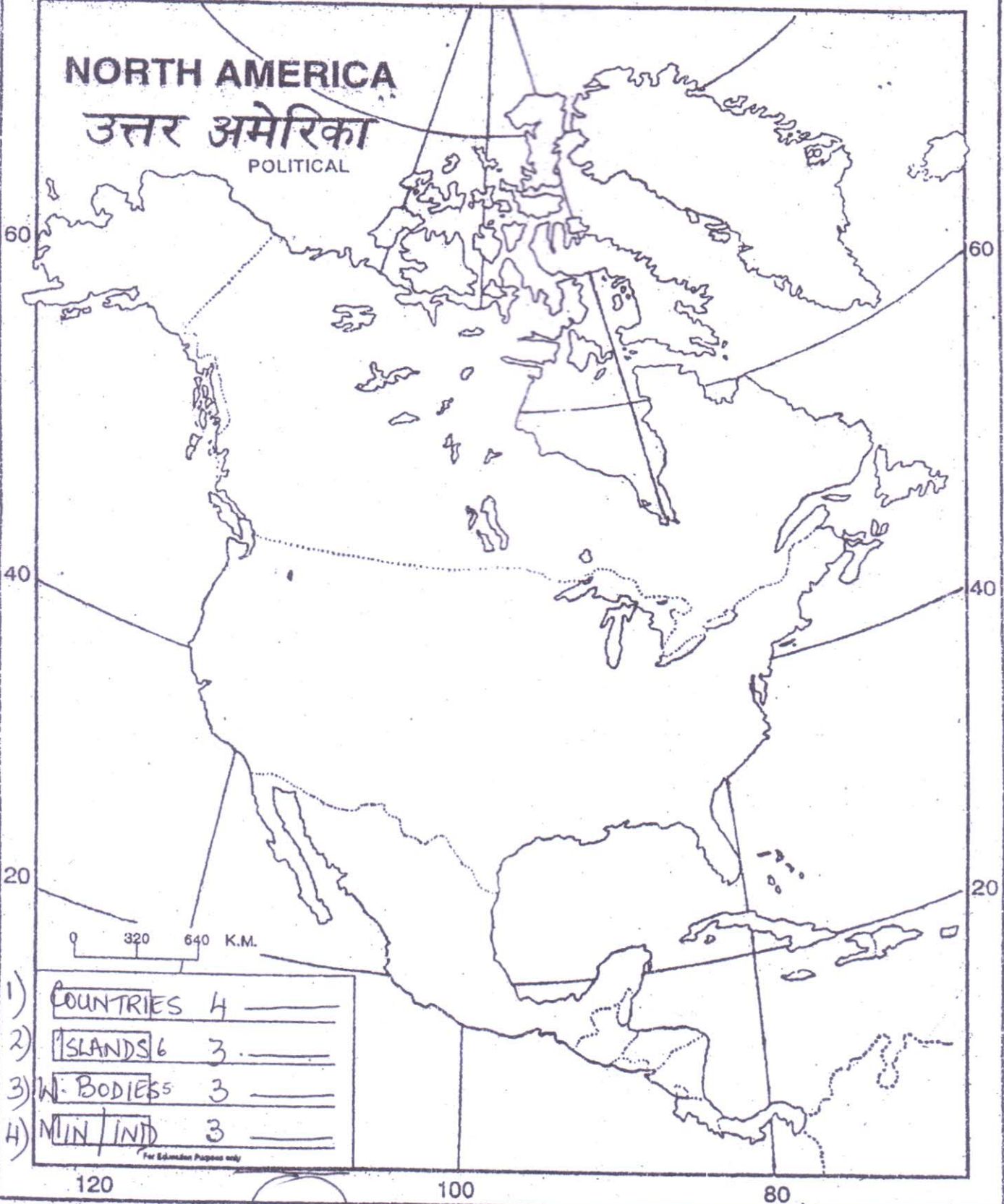
Roll No: _____

120 100 80

NORTH AMERICA

उत्तर अमेरिका

POLITICAL



1)	COUNTRIES	4	_____
2)	ISLANDS	6	3. _____
3)	W. BODIES	5	3 _____
4)	MIN/IND	3	_____

For Educational Purpose only

120

100

80

TOTAL: _____

For Educational Purpose M.R.P. Re. 1/-