

GREENLAWNS HIGH SCHOOL
TERMINAL EXAMINATION YEAR 2017-2018

SUBJECT : GEOGRAPHY

CLASS : VI

TIME : 1 1/2 HOURS

MARKS : 80

NAME : _____

CLASS : _____

ROLL NO: _____

(All the answers to questions I to VII to be written on the question paper itself)

SECTION A

Q.I Fill in the blanks:- (5)

1. The latitudinal extent of South America is _____ to _____.
2. The continent of South America is _____ in shape and tapers to a point at _____ in the South.
3. Most of South America lies between the _____ and the _____.
4. South America is surrounded by the _____ Ocean in the west and the _____ Ocean in the east.
5. The _____ is the deepest part of the earth's crust.
6. The _____ Ocean remains frozen for most part of the year.

Q.II Match the countries in column A with the correct capitals in column B and write your answer in column C. (4)

A	B	C
1. India	a) George town	Eg : 1 - i
2. Brazil	b) La Paz	_____
3. Ecuador	c) Santiago	_____
4. Peru	d) Paramaribo	_____
5. Uruguay	e) Lima	_____
6. Chile	f) Montevideo	_____
7. Guyana	g) Quito	_____
8. Bolivia	h) Asuncion	_____
9. Suriname	i) Delhi	_____
	j) Brasilia	_____

Q.III Give two examples for each of the following. (6)

1. Old fold mountains : _____
2. Young fold mountains: _____
3. Block mountains: _____
4. River valleys: _____
5. Rift valleys: _____
6. Plateaux found in India _____

Q.IV Mention the characteristics of the following climate found in South America. (3)

Climate	Characteristics
Equatorial	Temperature :
	Rainfall :
Hot Desert	Temperature :
	Rainfall :
Temperate	Temperature :
	Rainfall :

Q.V Fill in the boxes with the correct answers with the help of the clues given for each: (3)

1. A large ostrich found in the grasslands of the pampas:

2. A large preying bird found in the Andean region:

3. An animal found in the pampas:

4. An animal of the cat family commonly found in the pampas:

5. Found abundantly in the desert sands of the Atacama:

6. Droppings of these birds are used as manure:

Q.VI State whether the following are true or false. If false correct the sentence. (4)

- The Orinoco plains are referred to as the pampas.

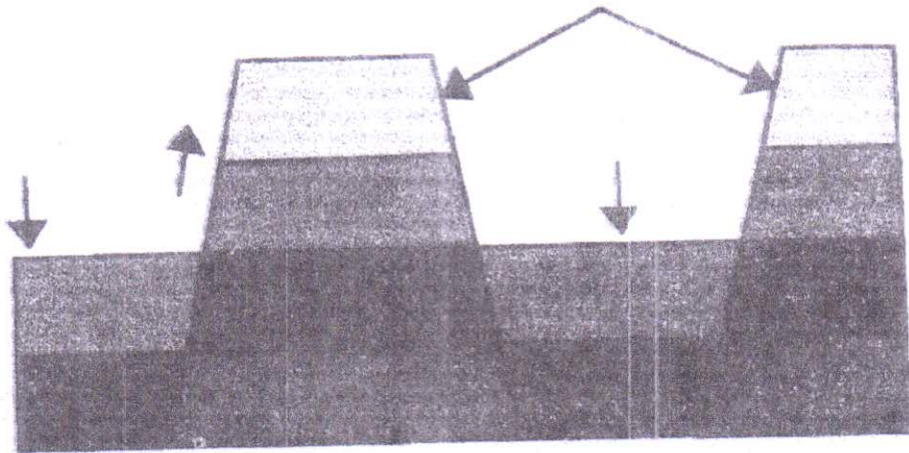
- Faulting is the rupturing or fracturing of rock strata due to strain.

- Lake Maracaibo in Chile is very important for mineral oil deposits.

- The Orinoco river flows from the Brazilian Highlands towards the Atlantic Ocean in Venezuela.

Q.VII Study the picture given below and answer the questions that follow:

(4)



1. What is being formed in the above diagram? (1)

2. Explain the process by which the above action takes place: (2)

3. How do the edges and surface area of these formed features appear? (1)

SECTION B

All Questions to be answered on the answering script.

- Q.VIII Give reasons for the following. (6)
1. Plateaux are of great economic value. (2)
 2. Oceans are very important. (any 2 reasons) (2)
 3. The Atacama desert receives little or no rainfall from the Trade winds. (2)
- Q.IX Distinguish between: (6)
1. Old fold and young fold mountains (2 differences) (2)
 2. River valley and rift valley (1 difference with eg.) (2)
 3. Atacama and Patagonian desert (characteristics & location) (2)
- Q.X Answer in brief. (14)
1. What is an inland sea? Give one example. (1)
 2. What is water pollution? (1)
 3. How are volcanic mountains formed? (2)
 4. What is a plateau? What is it also called? (2)
 5. What is subduction? (2)
 6. Name the relief features of South America? (2)
 7. Draw a volcano and label its parts. (4)
- Q.XI
1. On the outline map of South America given as Map I mark, name and shade the following:- (13)
 - i) Isthmus of Panama (1)
 - ii) Tierra Del Fuego (1)
 - iii) Mountains/Peaks (3)
 - a) Mt. Aconcagua
 - b) Mt. Cotopaxi
 - c) Mt. Chimborazo
 - iv) Plateau and Highlands: (2)
 - a) Brazilian plateau
 - b) Guiana highlands
 - v) Deserts: (2)
 - a) Atacama desert
 - b) Patagonian desert
 - vi) Rivers: (2)
 - a) River Tocantins
 - b) River Amazon
 - c) River Uruguay
 - d) River Orinoco
 - vii) Water bodies: (2)
 - a) Lake Titicaca
 - b) Magellan strait
 - c) Caribbean sea
 - d) Gulf of Venezuela

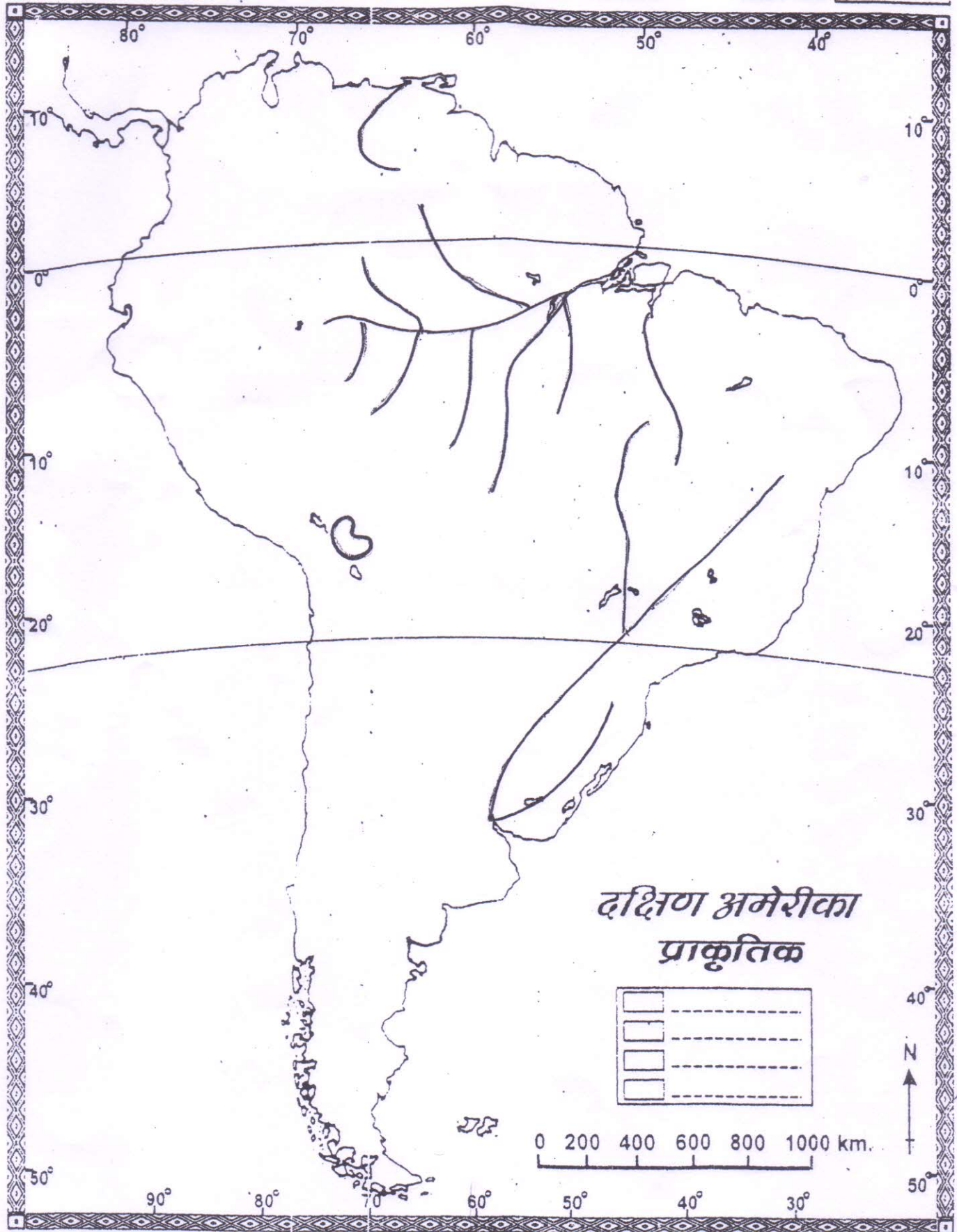
- 2) On the outline map of South America given as Map 2 mark, name and shade the following:- (12)
- i) Countries and capitals: (5)
 - a) Suriname
 - b) Paraguay
 - c) Santiago
 - d) Laz Paz
 - e) Argentina
 - ii) Vegetation and grasslands: (5)
 - a) Cool temperate forest
 - b) Warm temperate forest
 - c) Temperate grasslands (pampas)
 - d) Mediterranean region
 - e) Equatorial rain forest (selvas)
 - iii) Climate: (2)
 - a) A current which makes a hot desert climate drier.
 - b) A wind that brings rain to Brazil.

STD : _____ DIV : _____ ROLL NO : _____ *viij I*



SOUTH AMERICA PHYSICAL

NAME : _____
STD. : _____ DIV. : _____ DATE : _____
ROLL : _____ SEC. : _____ / / 200

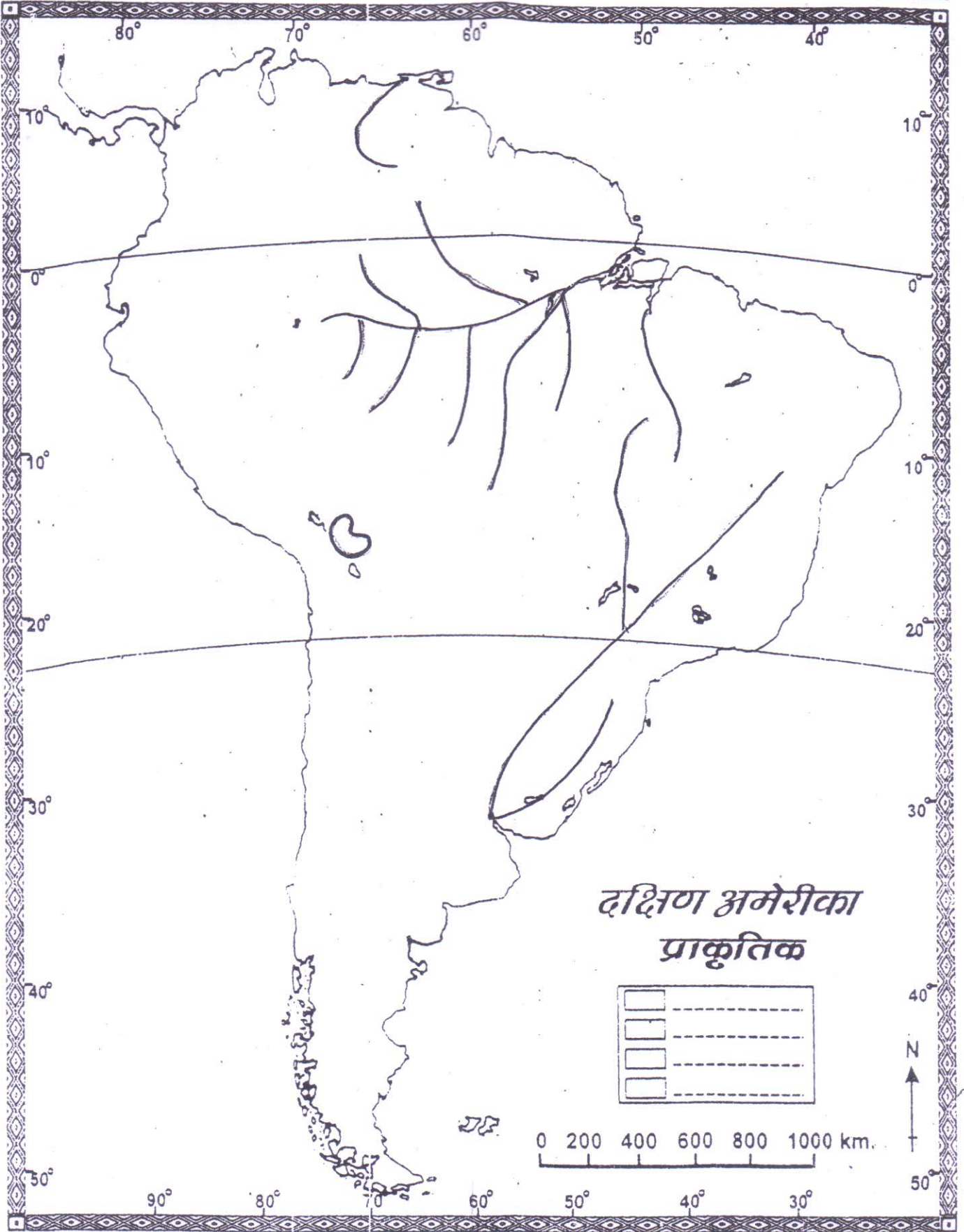


MARKS /

FOR EDUCATIONAL PURPOSE ONLY

TEACHER'S SIGN.:

Marks	i	ii	iii	iv	v	vi	vii



MARKS

FOR EDUCATIONAL PURPOSE ONLY

TEACHER'S SIGN.: _____

Marks

i	ii	iii	iv	v	vi	vii